

Map Test 3



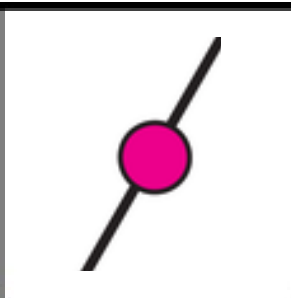
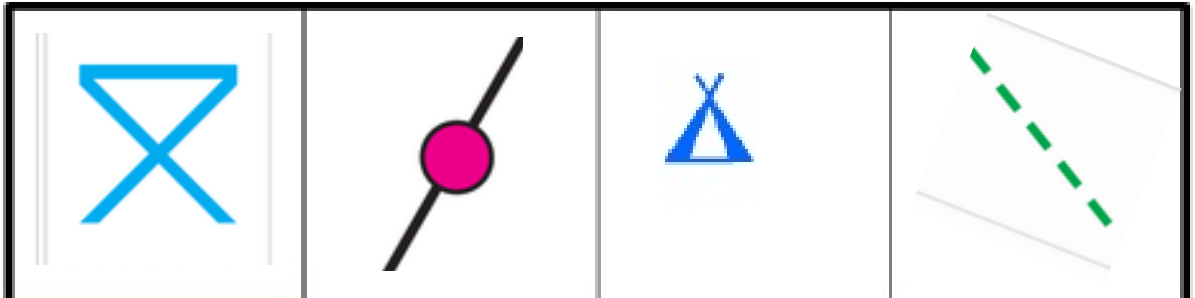
Name _____ Date _____

No	Questions	Answer
1	True or False - Grid references on maps help us find different places	True or false
2	What is an MS?	
3	True or False - Maps use east at the Top and West at the bottom	True or false
4	What is a blue table?	
5	True or False - Shading shows where lakes and rivers are	True or false
6	True or False - Rivers are blue	True or false
7	True or False - To show hills on a map they sometimes shade in so you can see them more easily	True or false
8	True or False - A level crossing is a black line with a pink line	True or false
9	What colour is water?	
10	What colour is a beach?	
11	True or False - The map scale means that 1:25,000 is 1cm = 25,000,000cm in real life	True or false
12	True or False - Maps show you details like dog poo, chewing gum and litter on the streets	True or false
13	True or False - Maps are useful so we do not get/ lost	True or false
14	True or False -	True or false
15	True or False - Maps are never 1:1 scale	True or false
16	True or False - Bridleways (paths for people and horses) are a green dashed line	True or false
17	True or False - Schools, shops and other buildings are grey	True or false
18	True or False - Wind turbines are a black stand with a cross on	True or false
19	Draw a symbol for a hill / mountain	




Map Test 3

Name _____ Date _____

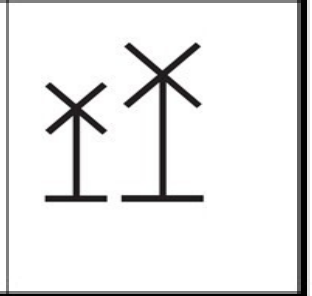


64



63



62



61

01

02

03

04

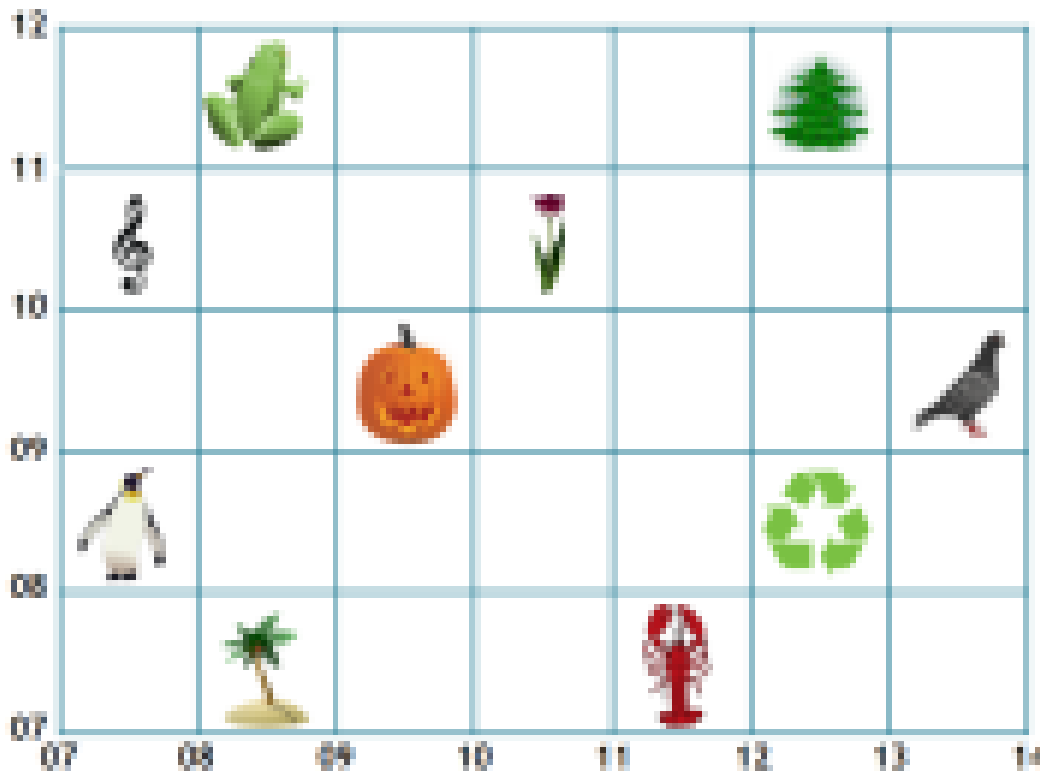
05

	Place	Northing	Easting		Place	Northing	Easting
1	Walker			6	Caravan Site		
2	Non Coniferous Forest			7	Viewing Point		
3	Church			8	Picnic site		
4	Camp Site			9	Train Station		
5	Wind turbine			10	Footpath		

Which symbol do you not find on an OS map? Why?

Map Test 3

Name _____ Date _____



Frog:.....

Flower:.....

Penguin:.....

Pigeon:.....

Lobster:.....

Christmas

tree:.....

Treble clef:.....

Desert island:.....

Recycling:.....

Pumpkin:.....